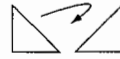
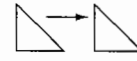


Moving Around

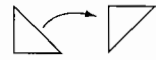
How would figure 1 move to form figure 2?
Write **flip**, **slide**, or **turn**.



flip

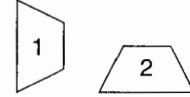
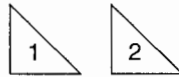


slide



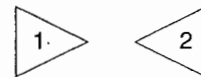
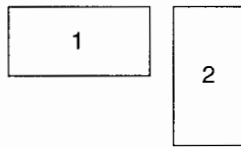
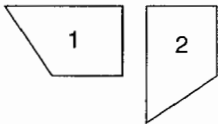
turn

A.

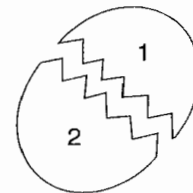
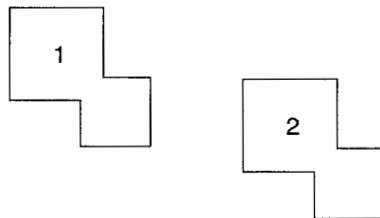
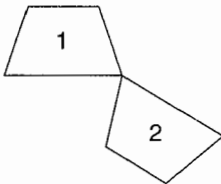


flip

B.



C.



D. On the back of this page, draw two figures that show the flip movement, two figures that show the slide movement, and two figures that show the turn movement.