

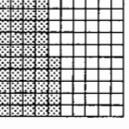








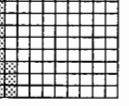


The Meaning of Percent

Write a ratio, a fraction, a decimal, and a percent for each drawing.

	ratio	fraction	decimal	percent
A.	 <u>33:100</u>	<u>$\frac{33}{100}$</u>	<u>0.33</u>	<u>33%</u>
B.		<u> </u>	<u> </u>	<u> </u>
C.		<u> </u>	<u> </u>	<u> </u>
D.		<u> </u>	<u> </u>	<u> </u>
E.		<u> </u>	<u> </u>	<u> </u>
F.		<u> </u>	<u> </u>	<u> </u>
G.		<u> </u>	<u> </u>	<u> </u>
H.		<u> </u>	<u> </u>	<u> </u>
I.		<u> </u>	<u> </u>	<u> </u>
J.		<u> </u>	<u> </u>	<u> </u>
K.		<u> </u>	<u> </u>	<u> </u>
L.		<u> </u>	<u> </u>	<u> </u>