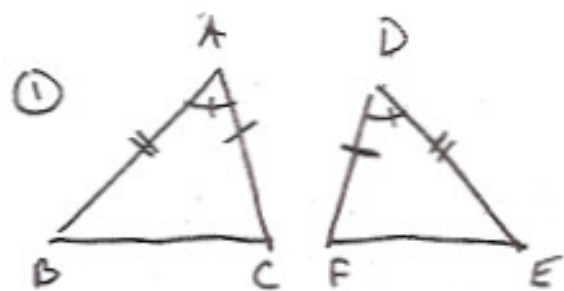
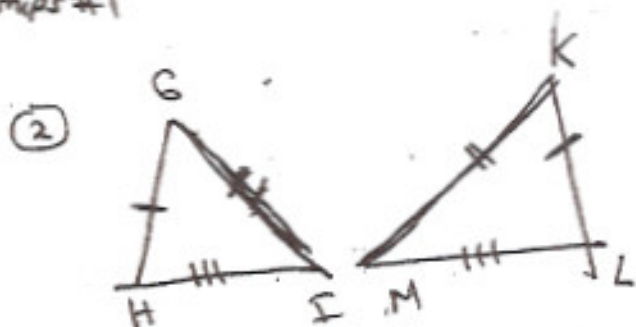


Name _____
 Due Date _____
 Block _____

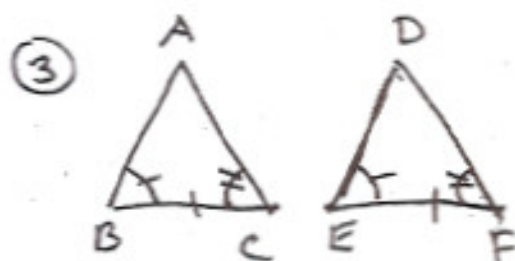
Shapes And Angle Relationships #1



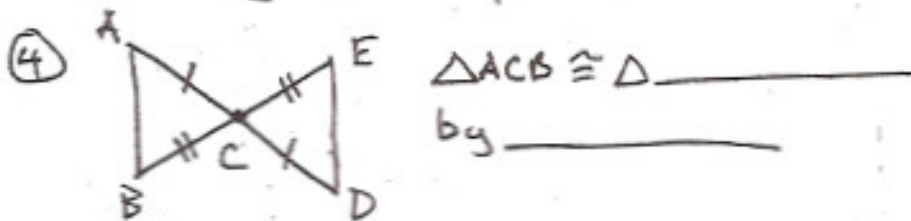
$\triangle ABC \cong \triangle$ _____ by _____



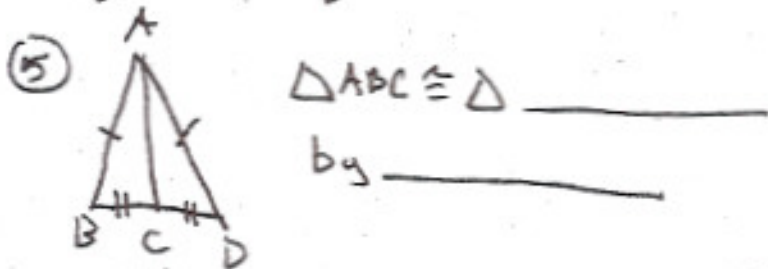
\triangle _____ $\cong \triangle$ MKL
 by _____



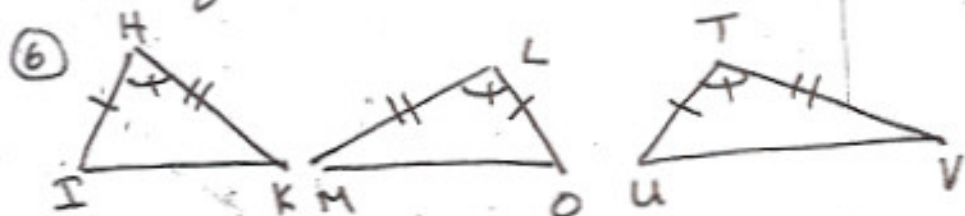
~~△ABC~~
 $\triangle CBA \cong \triangle$ _____
 by _____



$\triangle ACB \cong \triangle$ _____
 by _____



$\triangle ABC \cong \triangle$ _____
 by _____



$\triangle HKI \cong \triangle$ ~~LOM~~ LOM by _____
 $\triangle HKI \cong \triangle$ T by _____