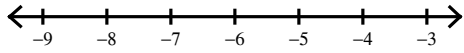
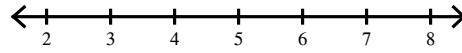


Solve each inequality and graph its solution.

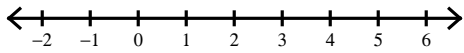
1) $n - 6 < -13$



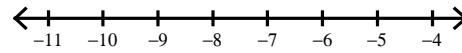
2) $x - (-8) > 12$



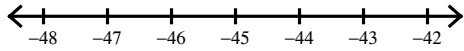
3) $-9b \geq -27$



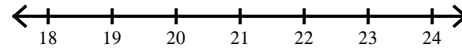
4) $-3r \leq 21$



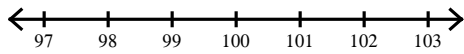
$$5) \frac{x}{9} \leq -5$$



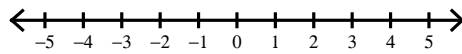
$$6) \frac{n}{3} \leq 7$$



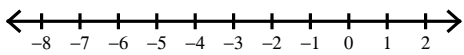
$$7) \frac{a}{10} > 10$$



$$8) v + (-4) \leq -4$$



$$9) x + 10 \geq 7$$



$$10) x - (-5) > 13$$

