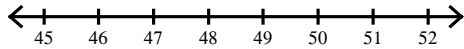
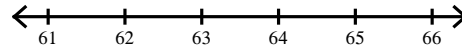


Solve each inequality and graph its solution.

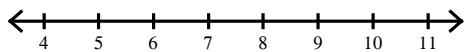
1) $\frac{p}{8} > 6$



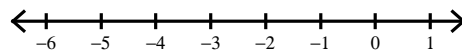
2) $\frac{x}{7} > 9$



3) $7n > 49$



4) $-7m < 28$



5) $\frac{r}{7} \leq 8$

