

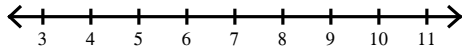
Inequalities #2

Name _____

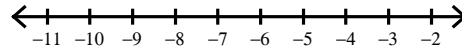
Date _____ Period _____

Solve each inequality and graph its solution.

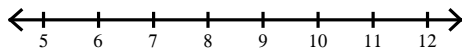
1) $m - (-19) \leq 25$



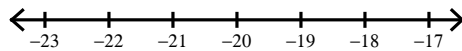
2) $r - 11 \geq -18$



3) $n + 19 \leq 28$



4) $x + (-10) > -29$



5) $-2 - b < -7$

