

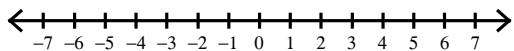
Inequalities #1.3

Name _____

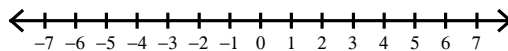
Date _____ Period _____

Draw a graph for each inequality.

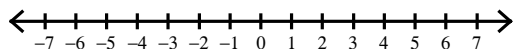
1) $-b \geq -1$



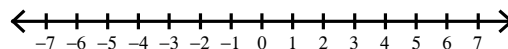
2) $-4 > -x$



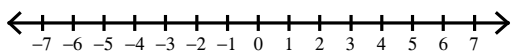
3) $b \geq 3$



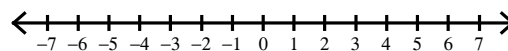
4) $6 < x$



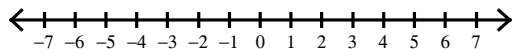
5) $-4 < x$



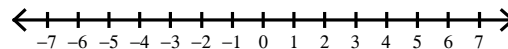
6) $-1 < a$



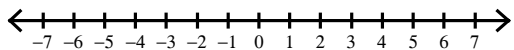
7) $-p \leq 3$



8) $6 \leq -p$



9) $v > 3$



10) $-n > 0$

