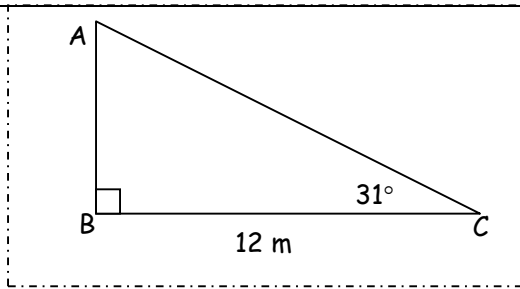
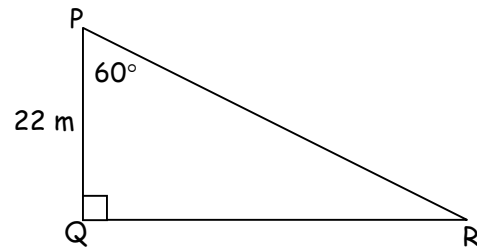


## Trigonometry: Solving for a side

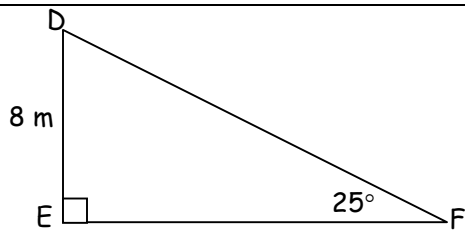
Determine the measure of the side indicated in each diagram.



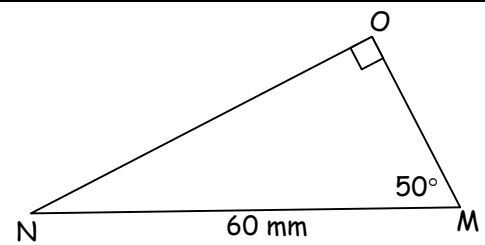
Solve for  $b$ .



Solve for  $p$ .

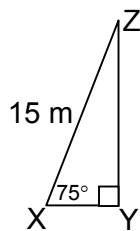


Solve for  $d$ .



Solve for  $m$ .

Solve for  $x$ .



Solve for  $i$ .

