

UNIT TEST #1

Do not write on this test. Use a number 2 pencil to bubble in the correct answer for each question. Be careful that when you bubble in your answers, the numbered answer on the sheet matches the numbered question on this test. There are 50 questions total and each question is worth 2 points. Good luck!

1. What is not an example of a social studies standard?
 - a. Economy
 - b. Culture
 - c. History
 - d. Geography

2. The fact that the climate influences the way that people dress is most closely related to which standard?
 - a. Economy
 - b. Culture
 - c. History
 - d. Geography

3. The ways that a society uses its resources (such as farming methods and trading valuable goods) is most closely related to which standard?
 - a. Economy
 - b. Culture
 - c. History
 - d. Geography

4. A "source" can best be defined as...
 - a. Something that provides information on a topic
 - b. Any piece of writing
 - c. Something that comes from the past
 - d. A place or event that was important in history

5. Which of the following is not an example of a primary source?
 - a. A personal diary
 - b. An eyewitness to an event
 - c. A photograph
 - d. A magazine article

6. What is the term for a source that does not come directly from an event or time period?
 - a. Primary source
 - b. Indirect source
 - c. Secondary source
 - d. Untrustworthy source

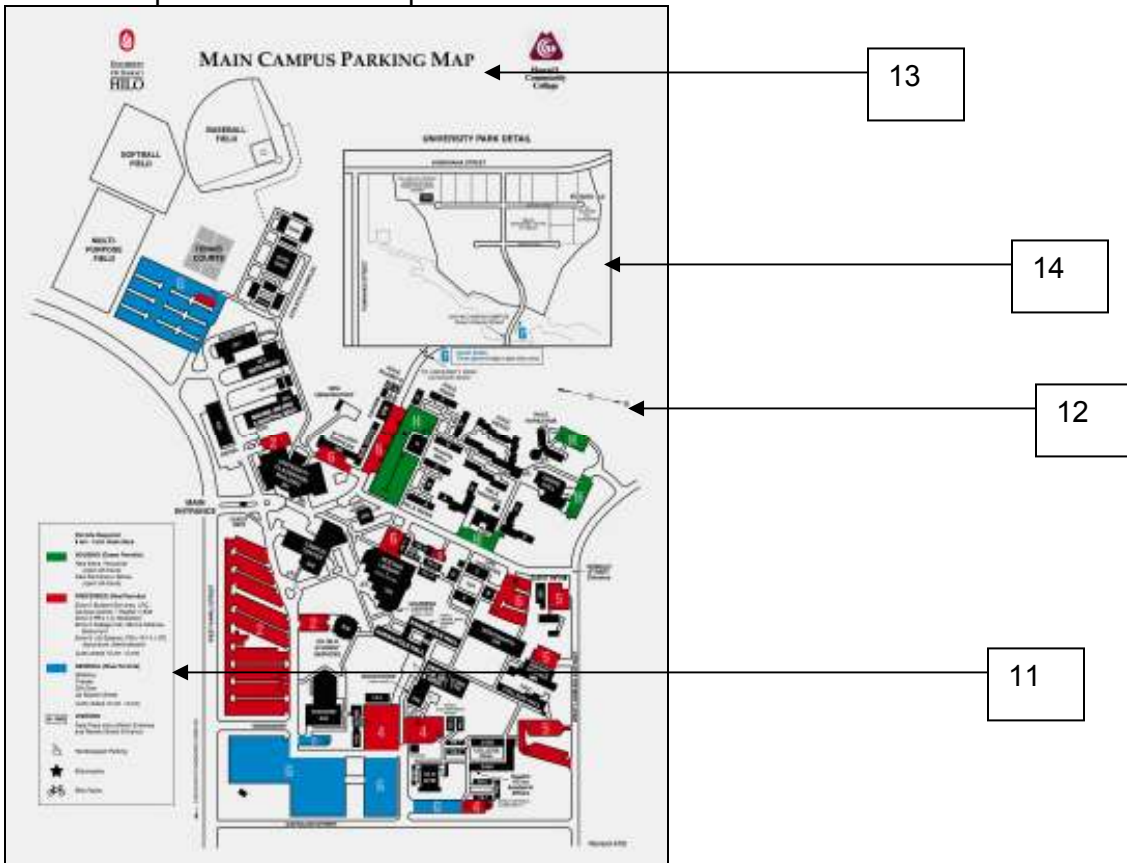
7. What is not an example of a weakness of primary sources?
 - a. They sometimes contain false information
 - b. They don't come straight from the event or time period
 - c. They can use difficult language
 - d. They often provide only one perspective

8. In a Primary Source Analysis, which step asks you to describe what the source is?
 - a. Evaluate
 - b. Examine
 - c. Identify
 - d. Contextualize

9. In a Primary Source Analysis, which step asks you to describe the factual information in the source?
 - a. Evaluate
 - b. Examine
 - c. Identify
 - d. Contextualize

10. In a Primary Source Analysis, which step asks you to describe when the source was created and who created the source?
 - a. Evaluate
 - b. Examine
 - c. Identify
 - d. Contextualize

Use the map below to answer questions 11-14...



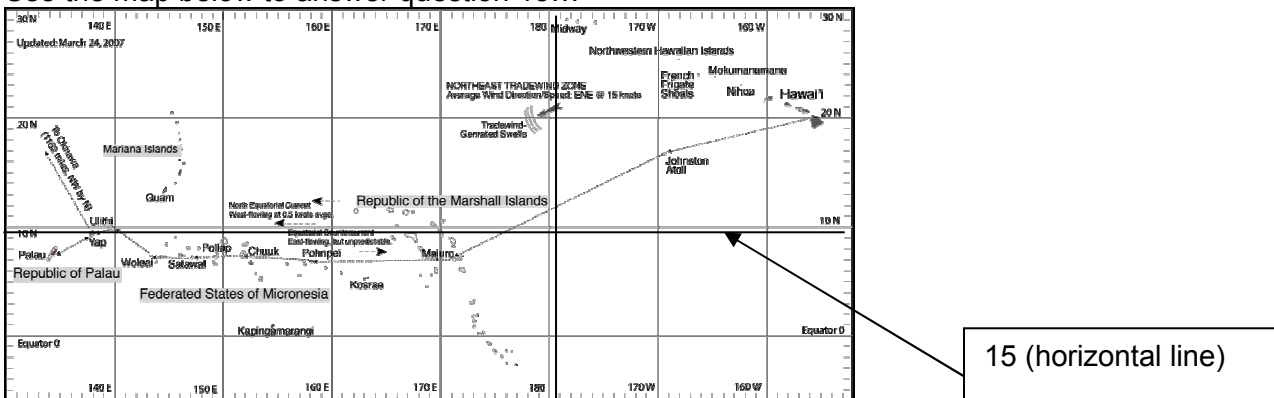
11. What is this feature?
 a. Compass Rose
 b. Title
 c. Key
 d. Inset Map

12. What is this feature?
 a. Compass Rose
 b. Title
 c. Key
 d. Inset Map

13. What is this feature?
 a. Compass Rose
 b. Title
 c. Key
 d. Inset Map

14. What is this feature?
 a. Compass Rose
 b. Title
 c. Key
 d. Inset Map

Use the map below to answer question 15...



15. What is this feature?
 a. Line of latitude
 b. Line of longitude

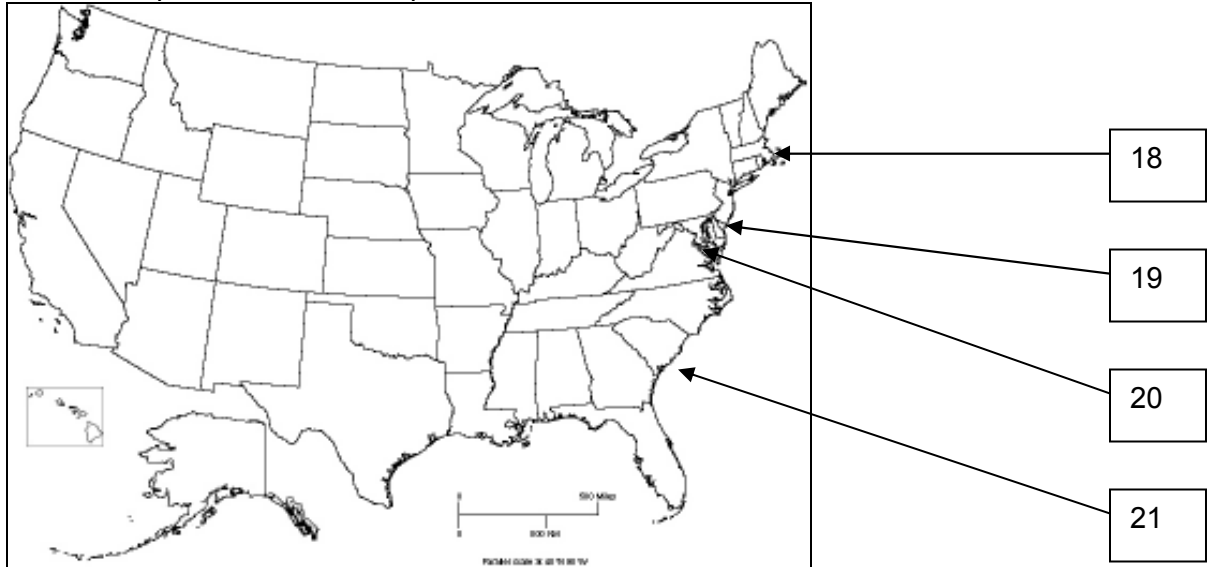
16. A physical map would likely show which of the following features? (circle all answers that apply)

- a. The Andes Mountains
- b. The country of Brazil
- c. The Atlantic Ocean
- d. The city of Cuzco

17. A political map would likely show which of the following features? (circle all answers that apply)

- a. The Andes Mountains
- b. The country of Brazil
- c. The Atlantic Ocean
- d. The city of Cuzco

Use the map below to answer questions 18-21...



18. What is this city?

- a. Washington D.C.
- b. Charleston
- c. Philadelphia
- d. Boston

19. What is this city?

- a. Washington D.C.
- b. Charleston
- c. Philadelphia
- d. Boston

20. What is this city?

- a. Washington D.C.
- b. Charleston
- c. Philadelphia
- d. Boston

21. What is this city?

- a. Washington D.C.
- b. Charleston
- c. Philadelphia
- d. Boston

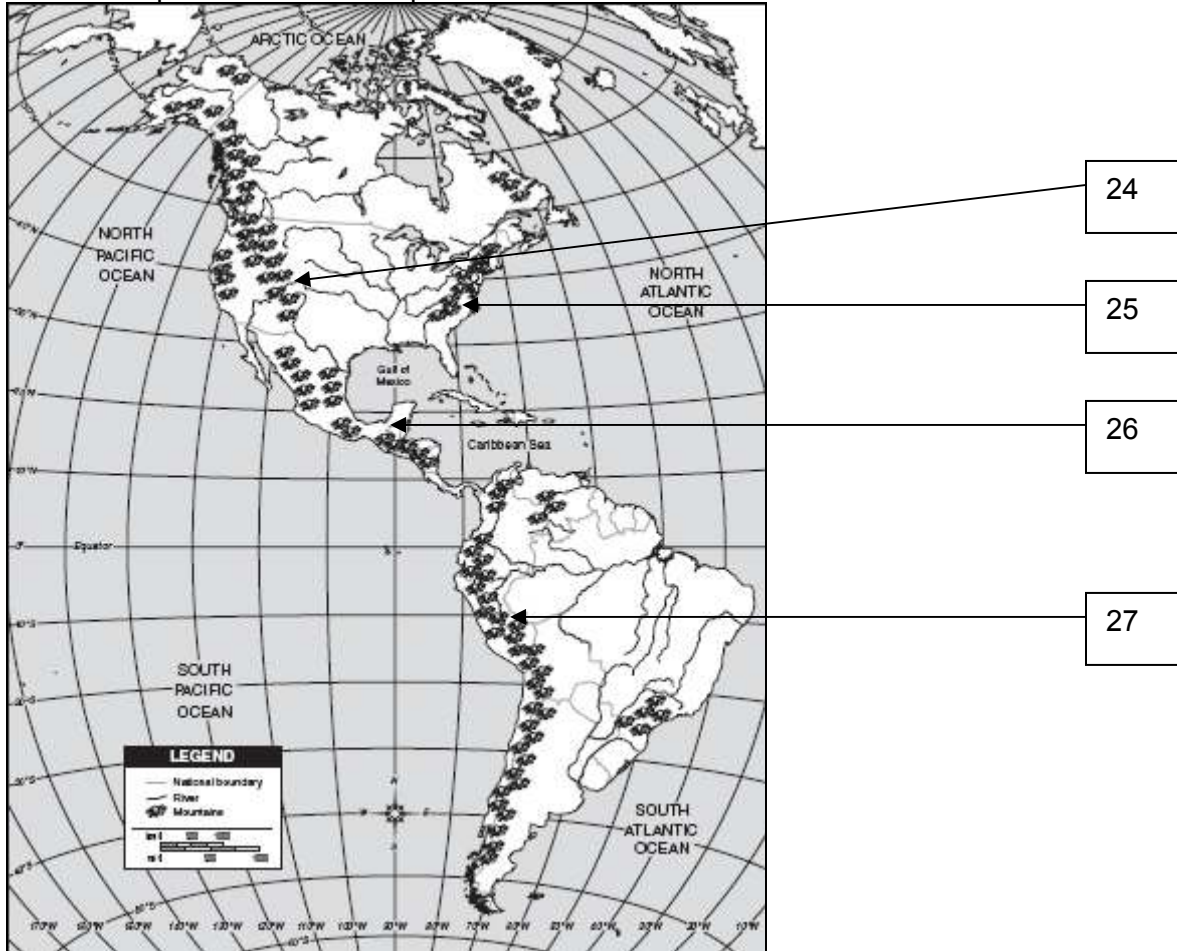
22. What ocean is to the east of the United States?

- a. Indian Ocean
- b. Pacific Ocean
- c. Appalachian Ocean
- d. Atlantic Ocean

23. What ocean is to the west of the United States?

- a. Indian Ocean
- b. Pacific Ocean
- c. Appalachian Ocean
- d. Atlantic Ocean

Use the map below to answer questions 24-27...



24. What is this location?
- Yucatan Peninsula
 - Andes Mountains
 - Appalachian Mountains
 - Rocky Mountains
25. What is this location?
- Yucatan Peninsula
 - Andes Mountains
 - Appalachian Mountains
 - Rocky Mountains
26. What is this location?
- Yucatan Peninsula
 - Andes Mountains
 - Appalachian Mountains
 - Rocky Mountains
27. What is this location?
- Yucatan Peninsula
 - Andes Mountains
 - Appalachian Mountains
 - Rocky Mountains
28. Where were the Aztecs located?
- Yucatan Peninsula
 - Andes Mountains
 - New York
 - Valley of Mexico
29. Where were the Inca located?
- Yucatan Peninsula
 - Andes Mountains
 - New York
 - Valley of Mexico
30. Where were the Iroquois located?
- Yucatan Peninsula
 - Andes Mountains
 - New York
 - Valley of Mexico

31. What is a defining feature of the Maya?
 - a. They conquered the Inca
 - b. They used chinampas to farm on Lake Texcoco
 - c. They used slash and burn agriculture
 - d. None of the above
32. What is a defining feature of the Algonquians?
 - a. They practiced human sacrifice
 - b. They had a confederation that led by a Grand Council
 - c. They used pictures in their writing system
 - d. None of the above
33. What is not true about the Inca?
 - a. They practiced slash and burn agriculture
 - b. They didn't have a system of writing
 - c. They had a federal government that oversaw 4 provinces
 - d. None of the above (a, b, and c are all true about the Inca)
34. What kinds of houses did the Iroquois build?
 - a. Teepees
 - b. Wigwams
 - c. Longhouses
 - d. Pyramids
35. What does it mean if you are semi-nomadic?
 - a. You hunt animals and gather wild food
 - b. You move from place to place depending on the season
 - c. You are smaller than nomadic people
 - d. You use chinampas to farm food
36. What American Indian civilization did Francisco Pizarro defeat?
 - a. Maya
 - b. Aztec
 - c. Inca
 - d. Iroquois
37. Which of the following is not one of the six Iroquois nations?
 - a. Mohawk
 - b. Seneca
 - c. Haudenosaunee
 - d. Oneida
38. What is something that the Algonquians used wampum for?
 - a. Currency
 - b. Gathering food
 - c. Building houses
 - d. Weapons
39. Which of the following American Indian groups was never conquered?
 - a. Maya
 - b. Aztec
 - c. Inca
 - d. Iroquois
40. What city was the capital of the Aztec civilization?
 - a. Tenochtitlan
 - b. Cuzco
 - c. Washington D.C.
 - d. Manchu Pichu
41. How did the first Americans reach the Americas?
 - a. Sailing across the Atlantic Ocean
 - b. Traveling across Antarctica
 - c. Traveling across the Bering Strait
 - d. Traveling with Christopher Columbus
42. What civilization created 2 separate calendars for agriculture and religion?
 - a. Iroquois
 - b. Inca
 - c. Aztec
 - d. Maya

43. What American Indian group spoke Nahuatl?
- Iroquois
 - Inca
 - Aztec
 - Maya
44. Who was Montezuma II?
- He conquered the Aztecs
 - He conquered the Inca
 - He was the Aztec ruler when the Spanish arrived
 - He was the Inca ruler when the Spanish arrived
45. Which of the following is a tribe that is a small part of a much larger language group?
- Algonquin
 - Algonquian
 - Algonkian
 - Iroquois
46. What is not an example of a crop that American Indian groups farmed before the arrival of Europeans?
- Corn
 - Barley
 - Beans
 - Squash
47. Manchu Pichu was built in which mountain range?
- Rocky Mountains
 - Andes Mountains
 - Appalachian Mountains
 - Himalaya Mountains
48. What American Indian civilization did not practice human sacrifice?
- Maya
 - Inca
 - Aztec
 - None of the above (a, b, and c all practiced human sacrifice)
49. Who was Atahualpa?
- He conquered the Aztecs
 - He conquered the Inca
 - He was the Aztec ruler when the Spanish arrived
 - He was the Inca ruler when the Spanish arrived
50. Where did Christopher Columbus think he had reached when he landed in the Americas?
- China
 - India
 - North America
 - South America