




Sortida

Quin es el recorregut del cavall?


Els nombres t'indiquen l'ordre dels salts en el concurs d'hípica.

Dibuixa una línia indicant el recorregut que han de seguir els genets.


1035 954 48 13400 46 2044 5418 94 30634
4575 9361 1541




$$23 \times 45 =$$




$$432 \div 9 =$$




$$345 + 609 =$$




$$67 \times 200 =$$




$$4376 + 435 + 607 =$$




$$901 \times 34 =$$




$$322 \div 7 =$$




$$752 \div 8 =$$




$$73 \times 28 =$$



$$4002 + 547 + 26 =$$



$$407 \times 23 =$$



$$23 \times 67 =$$

Arribada