

1. จงเขียนสูตรโครงสร้างของอะมีนต่อไปนี้

1.1 Dimethylethylamine

1.2 2-Aminopentane

1.3 o-Toluidine

1.4 Dimethylethylphenylammoniumchloride

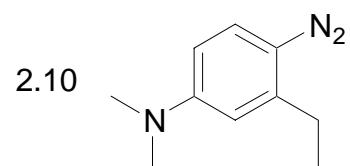
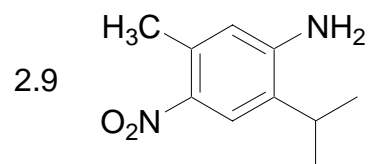
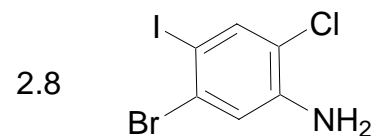
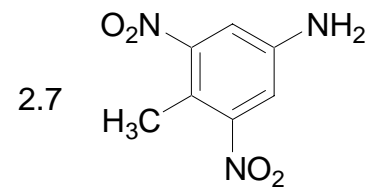
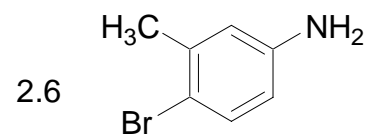
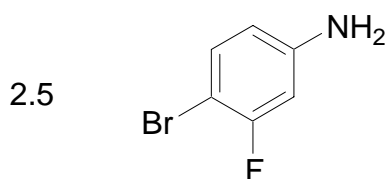
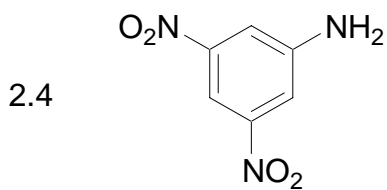
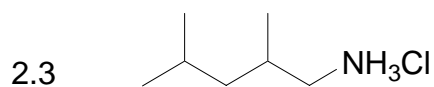
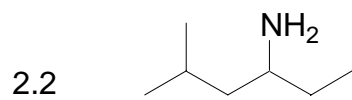
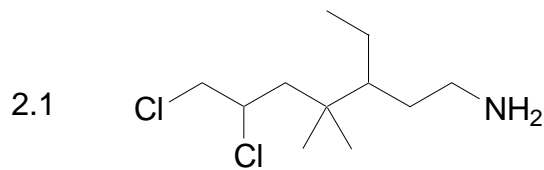
1.5 4-Aminoazobenzene

1.6 *tert*-Butylamine

1.7 Triphenylamine

1.8 2,3-Dinitroaniline

2. จงเรียกชื่ออะมีนต่อไปนี้



3. จงเขียนสมการเหล่านี้ให้สมบูรณ์

