

Name \_\_\_\_\_ Date \_\_\_\_\_

**Selecting Tack for Horses - TEST**

1. Mary Jane has just purchased a new horse. She wants to start him out by just learning to led. What type of harness does she need to use to have control of him?

- A. Bridle
- B. Rope
- C. Halter
- D. Just use feed and he will follow

2. Bobby wants to take his beautiful paint horse "Bob" out for a ride. He goes in the barn to get everything ready to ride but he is missing the most important accessory to "Bob's" head. What is Bobby missing?

- E. Halter
- F. Bridle
- G. Saddle
- H. Stable

3. Stephanie was just badly injured while riding her horse. As it turns out she had a bit in the horse's mouth that he was not used too. Why is it so important to get the horse familiar with the bit before riding?

- A. So that you will know how much pressure you can apply
- B. So the horse knows what it feels like
- C. So you can tell which one is the prettiest
- D. Both A and B

4. Bill is going out to train his horse to ride. He wants to start him off on a bit that creates direct pressure without leverage on the mouth. What type of bit should Bill use?

- E. Curb
- F. Combination
- G. Hackamore
- H. Snaffle


5. Jessica likes to use a bit on her horse that is characterized by uses leverage. What type of bit does Jessica prefer?

- A. Combination
- B. Curb
- C. Hackamore
- D. Snaffle

6. Jennifer uses a single rein bit less bridle for her horse. It is characterized by four main parts. What is Jennifer using on her horse?

- E. Hackamore
- F. Snaffle
- G. Curb
- H. Combination

Identify the parts of the Bridle as indicated by the number.



7. Identify number 7

- A. Headpiece
- B. Browband
- C. Reins
- D. Noseband

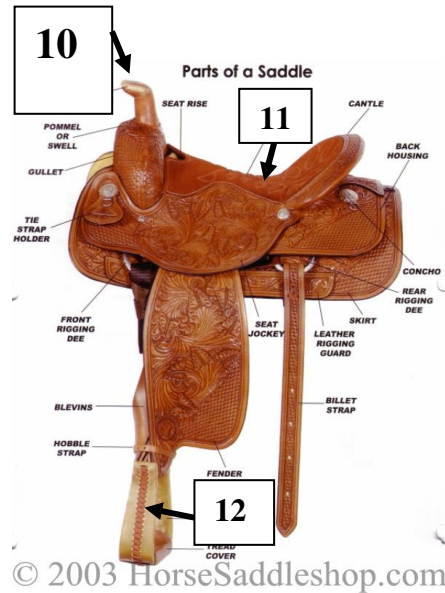
8. Identify number 8

- E. Headpiece
- F. Browband
- G. Reins
- H. Noseband

9. Identify number 9

- A. Headpiece
- B. Browband
- C. Reins
- D. Noseband

Identify the parts of the English Saddle as indicated by the number.



© 2003 HorseSaddleshop.com

10. Identify number 10

- E. Horn
- F. Skirt
- G. Stirrup
- H. Seat

11. Identify number 11

- A. Horn
- B. Skirt
- C. Stirrup
- D. Seat

12. Identify number 12

- E. Horn
- F. Skirt
- G. Stirrup
- H. Seat

13. Every time Mike goes out to ride his horse he just throws the blanket and saddle on. What procedures should Mike follow before saddling his horse?

- A. Always brush your horse first so there is no dirt or items on the horse that could hurt him when you put the blanket and saddle on.
- B. Always wash your horse so he is wet when the blanket goes on.
- C. Always put a lot of oil on the horse so he is shiny.
- D. All of the above are correct.

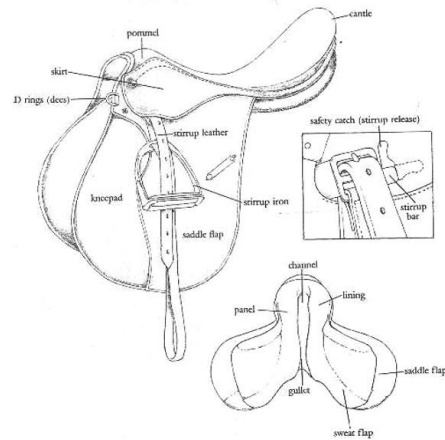
14. Amy wants to participate in horse showing events. She has a big saddle and a full blanket. What would be the best event for her to participate in?

- E. Horsemanship
- F. English
- G. Western Pleasure
- H. Hunter

15. Kristen's favorite event to watch on TV is the one where the riders wear small black helmets, tight tan pants and tall black boots. What is Kristen's favorite event?

- A. Horsemanship
- B. English
- C. Western Pleasure
- D. Hunter

Answer the following questions about this saddle.



16. What type of saddle is this?


- A. English
- B. Western
- C. Pleasure
- D. None of the above

17. What does a western saddle have that this one does not?

- A. Stirrup
- B. Skirt
- C. Horn
- D. Rings



21. Compare and Contrast a Curb Bit and a Hackamore.

A large, empty rectangular box with a thin black border, intended for the student to write their comparison and contrast of a curb bit and a hackamore. The box occupies most of the page below the question.