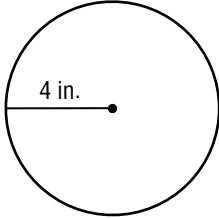


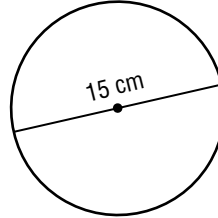
**6-9****Practice: Skills****Geometry: Circles and Circumference**

Find the circumference of each circle. Use 3.14 or  $\frac{22}{7}$  for  $\pi$ . Round to the nearest tenth if necessary.

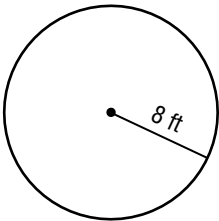
1.



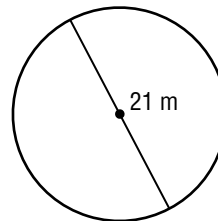
2.



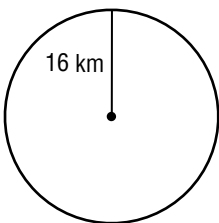
3.



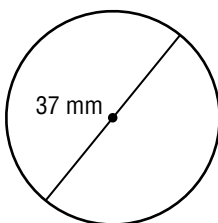
4.



5.



6.



7. radius = 3 km

8. radius = 46 cm

9. diameter = 30 in.

10. diameter = 25 m

11. radius = 5 ft

12. diameter =  $9\frac{1}{2}$  in.

13. radius =  $3\frac{1}{2}$  ft

14. diameter = 9.7 mm

15. radius = 5.2 km

16. diameter = 12 m

17. radius = 22 ft

18. diameter = 9.4 in.

19. radius = 100 m

20. radius = 65 mi

21. diameter =  $10\frac{1}{2}$  in.

22. diameter = 8.5 cm