

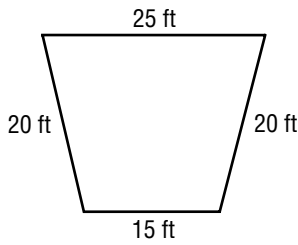
6-8

Practice: Skills

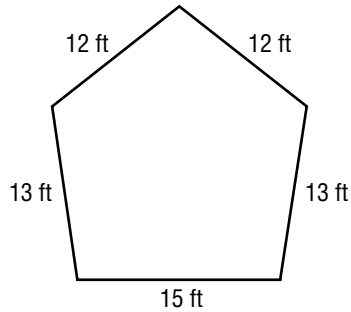
Geometry: Perimeter and Area

Find the perimeter of each figure.

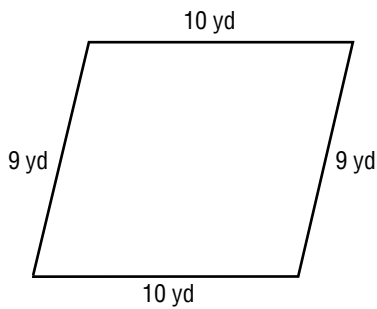
1.



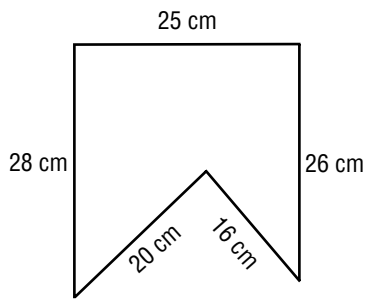
2.



3.



4.

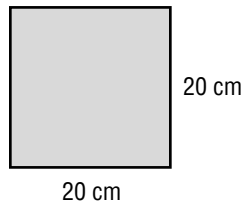


Find the perimeter and area of each rectangle.

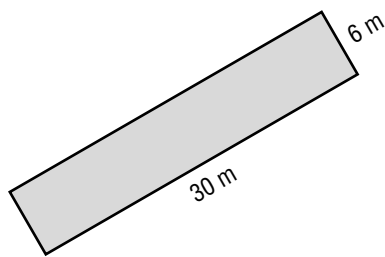
5.



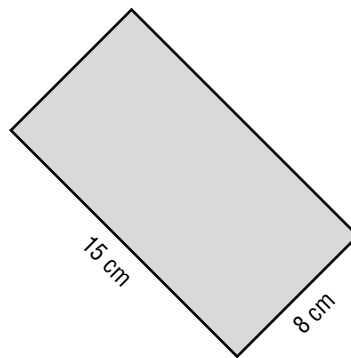
6.



7.



8.



9. $\ell = 6$ yd, $w = 4$ yd

10. $\ell = 8.2$ m, $w = 7.1$ m

11. $\ell = 50$ in., $w = 10$ in.

12. $\ell = 10$ cm, $w = 4\frac{1}{2}$ cm

13. $\ell = 4.5$ ft, $w = 3$ ft

14. $\ell = 7\frac{1}{2}$ mm, $w = 6\frac{3}{8}$ mm