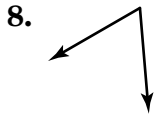
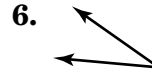
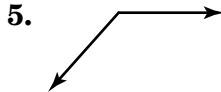

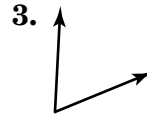
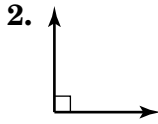
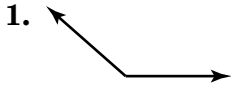


10-1

Practice: Skills

Angles

Classify each angle as *acute*, *obtuse*, *right*, or *straight*.



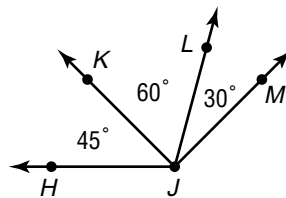
Draw an angle having each measurement. Then classify each angle as *acute*, *obtuse*, *right*, or *straight*.

10. 42°

11. 125°

12. 90°

Use the figure at the right.



13. Name the acute angles.

14. Find $m\angle KJM$.

15. Name an angle adjacent to $\angle LJM$.