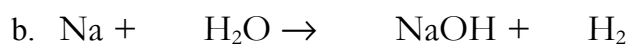


Name

Big sheet of balancing equations

Balance the symbol equations – remember you can only use big numbers to do this! Write the word equations underneath the symbol equations

1. These are all of the type

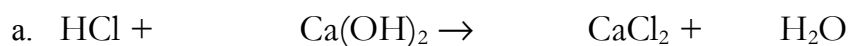


2. These are all of the type

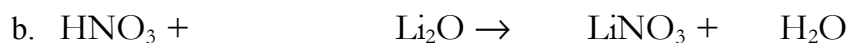


Name _____

3. These are all of the type



4. These are all of the type



5. These are all of the type

