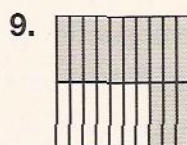

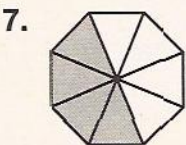
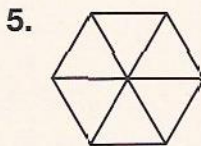

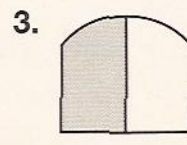

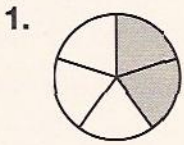


SKILL 10: Practice

What percent of the figure is shaded?

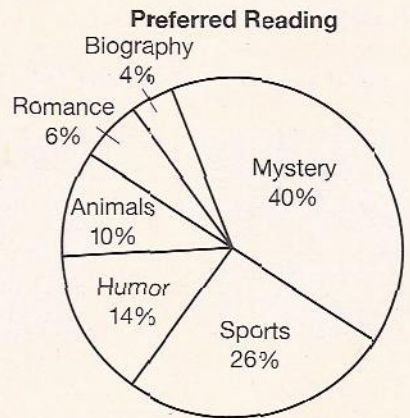


Solve each problem using the circle graph.


10. What percent of the preferred reading is humor or mystery books? _____

11. What types of books together represent 90% of the preferred reading? _____

12. What percent is represented by the entire circle? _____



TEST PREP

13. What percent of the figure is shaded?  Skill 10

A 0.4

C 40%

B $\frac{2}{5}$

D 60%

14. Jo saves \$6 out of every \$15 she earns. How much does she save out of \$100 earned? Skill 7

F \$40

H \$25

G \$90

J \$250